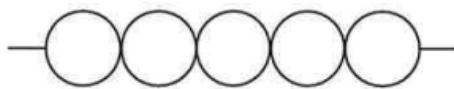
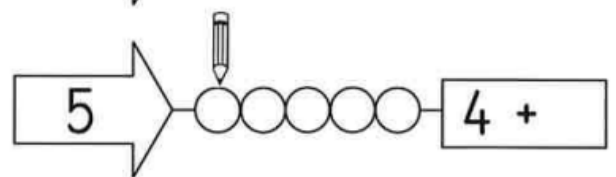
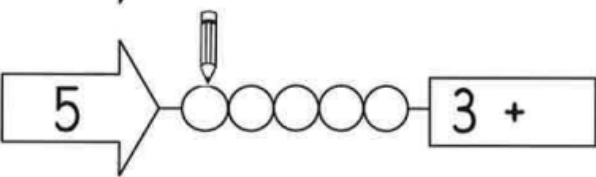


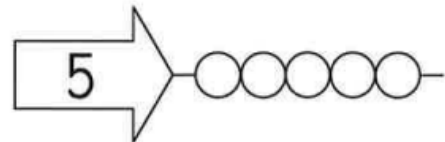
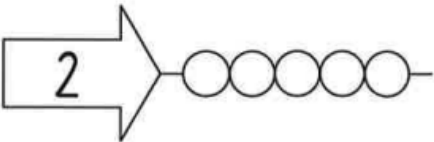
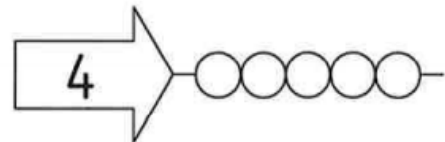
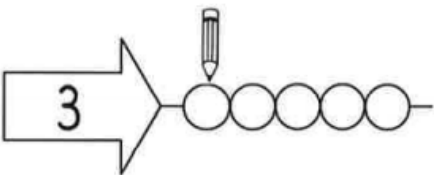
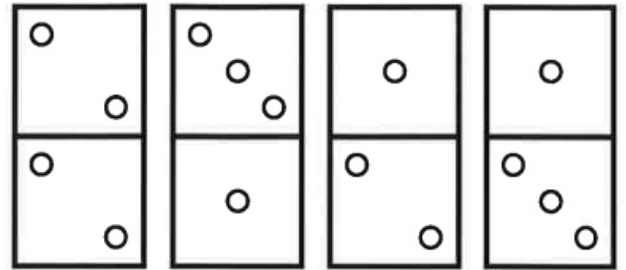
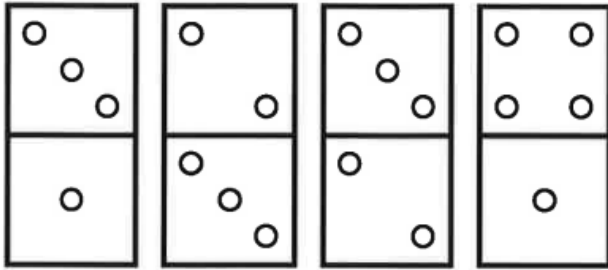
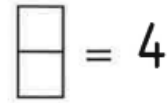
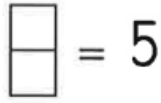


bis 5

Name: _____

43

Anzeichnen, welche Würfel ergeben 5



$5 = 3 + \underline{\quad}$

$5 = 1 + 1 + \underline{\quad}$

$5 = \underline{\quad} + 4$

$5 = 1 + \underline{\quad}$

$5 = 3 + 1 + \underline{\quad}$

$5 = \underline{\quad} + 2$

$5 = 2 + \underline{\quad}$

$5 = 2 + 2 + \underline{\quad}$

$5 = \underline{\quad} + 1$

$5 = 4 + \underline{\quad}$

$5 = 1 + 2 + \underline{\quad}$

$5 = \underline{\quad} + 3$

Name:

NACHZEICHNEN

