
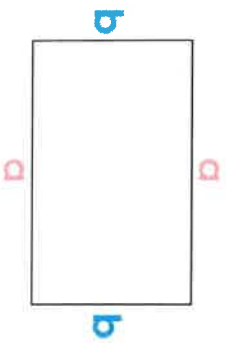


Berechne die fehlende Seite!

30

$$a = 45\text{m}$$
$$U = 160\text{m}$$

$$b = ?$$


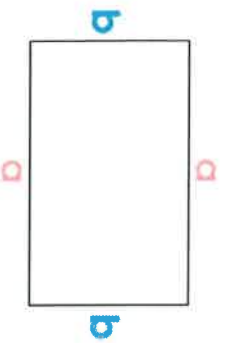


Berechne die fehlende Seite!

32

$$b = 22\text{m}$$
$$U = 170\text{m}$$

$$a = ?$$


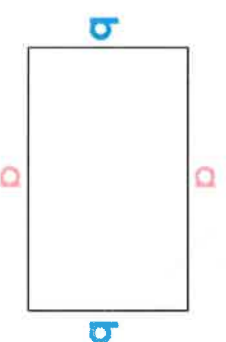


Berechne die fehlende Seite!

31

$$a = 37\text{m}$$
$$U = 120\text{m}$$

$$b = ?$$

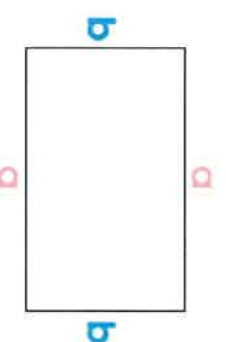


Berechne die fehlende Seite!

33

$$b = 9\text{m}$$
$$U = 74\text{m}$$

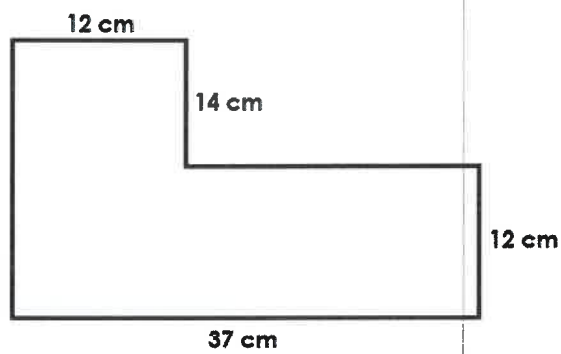
$$a = ?$$



19

Berechne den Umfang!

$U = ?$

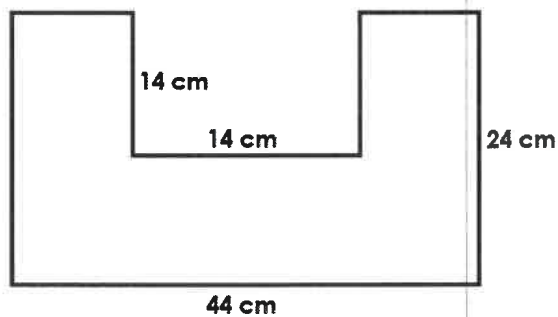


www.spielend-leicht-lernen.at

21

Berechne den Umfang!

$U = ?$



www.spielend-leicht-lernen.at